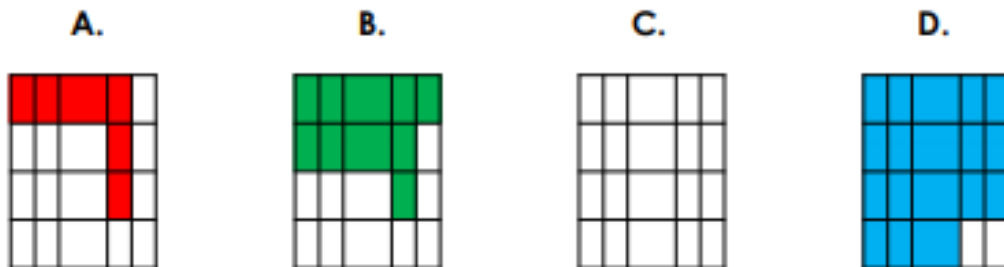


Making Shapes

7. Complete Shape C so that the area increases with each shape.




VF
HW/Est

8. Make each of the shapes according to the statements.


A.

5 squares and 3 half squares



B.

7 squares and 2 half squares



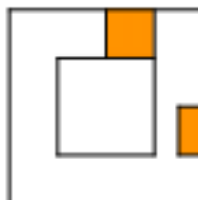
C.

6 squares and 4 half squares



VF
HW/Est

9. Tommy and Keisha are discussing making the following shape.



Tommy

I can use 10 more squares and 1 half square to make this shape.

I can use 7 more half squares and 6 squares to make this shape.



Keisha

Explain who is correct. Prove it by making the shape.